






Stage 0. Grade 1. Первый урок по теме «Состав числа 7»
 Task. Исследуя закономерности, изучить состав числа 7.

1). 1, 3, 5,

2). ● - ?



3).



$$7 = 6 + \square$$

$$7 = \square + \square$$

$$7 = \square + \square$$

4). $7 = \square + \square$

$7 = \square + \square$

$7 = \square + \square$

$7 = \square + \square$

$7 = \square + \square$

$7 = \square + \square$

$7 = \square + \square$

$7 = \square + \square$